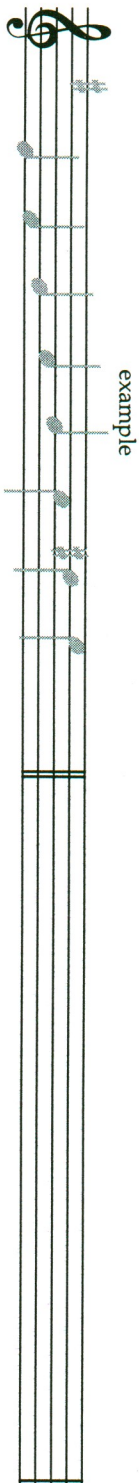


Worksheet 23. Material: Chapter 7.

name _____

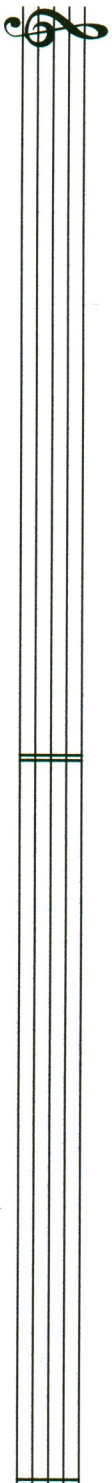
Provide the needed key signatures for each scale and write the scale in ascending form in quarter notes.

example



relative minor (harmonic) of G major

parallel minor (harmonic) of G major



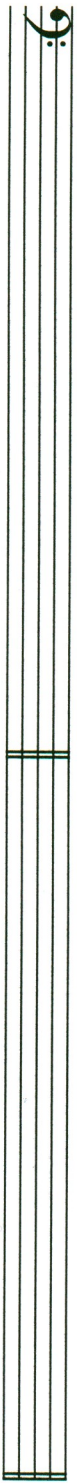
relative minor (harmonic) of B major

parallel minor (harmonic) of B major



relative minor (harmonic) of Ab major

parallel minor (harmonic) of Ab major



relative minor (harmonic) of A major

parallel minor (harmonic) of A major

