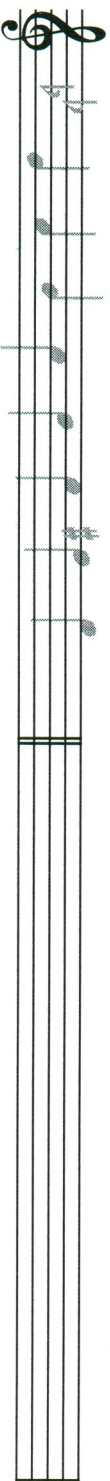


Worksheet 22. Material: Chapter 6.


name _____

Provide the correct key signature at the beginning of each line and write each scale in ascending form, using quarter notes.



g (harmonic) minor

relative major




b (harmonic) minor

relative major



f (harmonic) minor

relative major



g# (harmonic) minor

relative major

