


Worksheet 21. Material: Chapter 6.

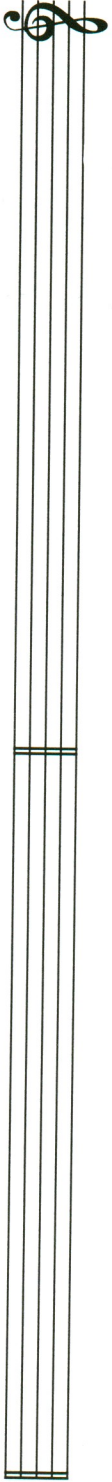
name _____

Provide the correct key signature at the beginning of each line and write each scale in ascending form, using quarter notes.




G major

relative minor (harmonic)




E \flat major

relative minor (harmonic)



E major

relative minor (harmonic)



D \flat major

relative minor (harmonic)

