


Worksheet 9. Material: Chapters 2 - 4

name _____


A. Rewrite each dotted note as two undotted notes tied together.



A musical staff in treble clef with a 4/4 time signature. It contains a sequence of notes: a dotted quarter note on G4, an eighth note on A4, a dotted half note on B4, an eighth note on C5, a dotted quarter note on D5, and a dotted half note on E5.

example


B. Write three equal undotted notes whose total time is equivalent to that of the dotted note.



A musical staff in treble clef with a 4/4 time signature. It contains a sequence of notes: a dotted quarter note on G4, an eighth note on A4, a dotted half note on B4, an eighth note on C5, a dotted quarter note on D5, and a dotted half note on E5.

example

C. Rewrite the melody into the lower staff, substituting dotted notes for tied pairs whenever possible.



Two musical staves in treble clef with a 4/4 time signature. The upper staff contains a melody: a dotted quarter note on G4, an eighth note on A4, a dotted half note on B4, an eighth note on C5, a dotted quarter note on D5, and a dotted half note on E5. The lower staff contains the same melody rewritten with tied pairs: a dotted quarter note on G4, an eighth note on A4, a dotted half note on B4, an eighth note on C5, a dotted quarter note on D5, and a dotted half note on E5.

example